

Limba română



1 Alege imaginea a cărei denumire începe cu sunetul **M**.



2 Alege imaginea a cărei denumire este formată din două silabe.





3 Din câte cuvinte este formată propoziția de mai jos?

ANA HRĂNEȘTE PISICA.

A 2 cuvinte **B** 3 cuvinte **C** 4 cuvinte



4 Alege imaginea care reprezintă OPUSUL cuvântului **TRIST**.



5 Alege propoziția adevărată.

- A** Scufița Roșie a fost păcălită de urs.
- B** Albă-ca-Zăpada și-a pierdut pantoful la bal.
- C** Pinocchio era o păpușă din lemn.





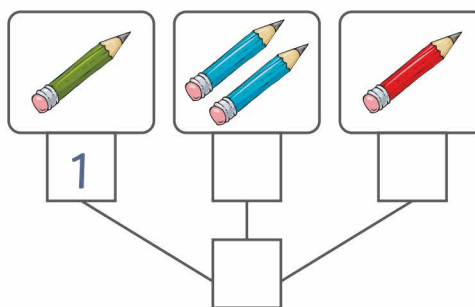
Matematică

1 Alege mulțimea fructelor așezate în ordinea crescătoare a numerelor.

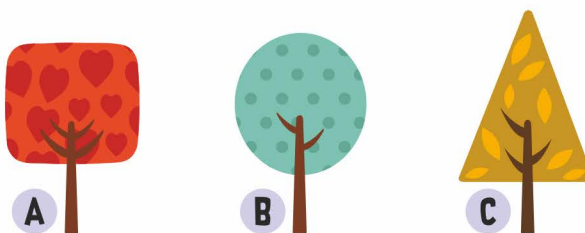


2 Câte creioane sunt în total?
Compune, pornind de la imagini.

A 5 B 3 C 4



3 Alege copacul în formă de pătrat.



4 Alege avionul diferit.





5 Alege copilul care ține un obiect în mâna dreaptă.



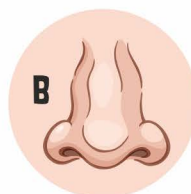
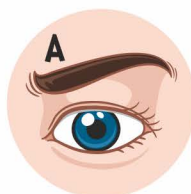
Științe



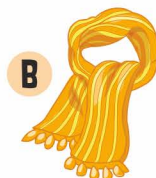
1 Alege mulțimea legumelor de toamnă.





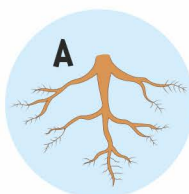
2 Alege organul de simț care te ajută să recunoști parfumul mamei.




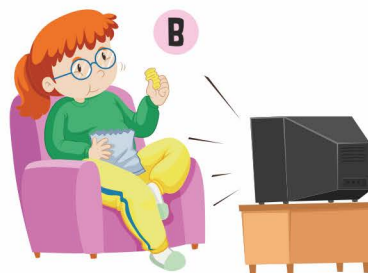
3 Alege obiectul vestimentar cu care îți protejezi membrele.



4 Identifică tulpina plantei.



5 Alege imaginea în care recunoști un comportament nesănătos.



Concursul Național "AMINTIRI din COPILĂRIE"
An școlar 2017-2018
Etapa I - 10 noiembrie

CLASA CP 1 2 3 4

RĂSPUNSURI

Limba română			
	A	B	C
1	<input type="checkbox"/>	<input type="checkbox"/>	<input checked="" type="checkbox"/>
2	<input checked="" type="checkbox"/>	<input type="checkbox"/>	<input type="checkbox"/>
3	<input type="checkbox"/>	<input checked="" type="checkbox"/>	<input type="checkbox"/>
4	<input checked="" type="checkbox"/>	<input type="checkbox"/>	<input type="checkbox"/>
5	<input type="checkbox"/>	<input type="checkbox"/>	<input checked="" type="checkbox"/>
6	<input type="checkbox"/>	<input type="checkbox"/>	<input type="checkbox"/>
7	<input type="checkbox"/>	<input type="checkbox"/>	<input type="checkbox"/>
8	<input type="checkbox"/>	<input type="checkbox"/>	<input type="checkbox"/>
9	<input type="checkbox"/>	<input type="checkbox"/>	<input type="checkbox"/>
10	<input type="checkbox"/>	<input type="checkbox"/>	<input type="checkbox"/>

Matematică			
	A	B	C
1	<input type="checkbox"/>	<input checked="" type="checkbox"/>	<input type="checkbox"/>
2	<input type="checkbox"/>	<input type="checkbox"/>	<input checked="" type="checkbox"/>
3	<input checked="" type="checkbox"/>	<input type="checkbox"/>	<input type="checkbox"/>
4	<input type="checkbox"/>	<input checked="" type="checkbox"/>	<input type="checkbox"/>
5	<input checked="" type="checkbox"/>	<input type="checkbox"/>	<input type="checkbox"/>
6	<input type="checkbox"/>	<input type="checkbox"/>	<input type="checkbox"/>
7	<input type="checkbox"/>	<input type="checkbox"/>	<input type="checkbox"/>
8	<input type="checkbox"/>	<input type="checkbox"/>	<input type="checkbox"/>
9	<input type="checkbox"/>	<input type="checkbox"/>	<input type="checkbox"/>
10	<input type="checkbox"/>	<input type="checkbox"/>	<input type="checkbox"/>

Științe			
	A	B	C
1	<input checked="" type="checkbox"/>	<input type="checkbox"/>	<input type="checkbox"/>
2	<input type="checkbox"/>	<input checked="" type="checkbox"/>	<input type="checkbox"/>
3	<input type="checkbox"/>	<input type="checkbox"/>	<input checked="" type="checkbox"/>
4	<input type="checkbox"/>	<input type="checkbox"/>	<input checked="" type="checkbox"/>
5	<input type="checkbox"/>	<input checked="" type="checkbox"/>	<input type="checkbox"/>
6	<input type="checkbox"/>	<input type="checkbox"/>	<input type="checkbox"/>
7	<input type="checkbox"/>	<input type="checkbox"/>	<input type="checkbox"/>
8	<input type="checkbox"/>	<input type="checkbox"/>	<input type="checkbox"/>
9	<input type="checkbox"/>	<input type="checkbox"/>	<input type="checkbox"/>
10	<input type="checkbox"/>	<input type="checkbox"/>	<input type="checkbox"/>

MODUL de CALCUL al PUNCTAJULUI

PUNCTAJ din OFICIU	40p
PUNCTAJ SUBIECTE	$15 \times 4p = 60p$
PUNCTAJ TOTAL	100p